

Week beginning Monday 25th May 2020

Hello all! As always, it is important to note that this work is a guide. It should not be stressful or cause added strain at an already difficult time. I hope you are all managing well with the remote learning. Please do not hesitate to contact me if you have a question or need extra support.

Every day we recommend that your child complete the following:

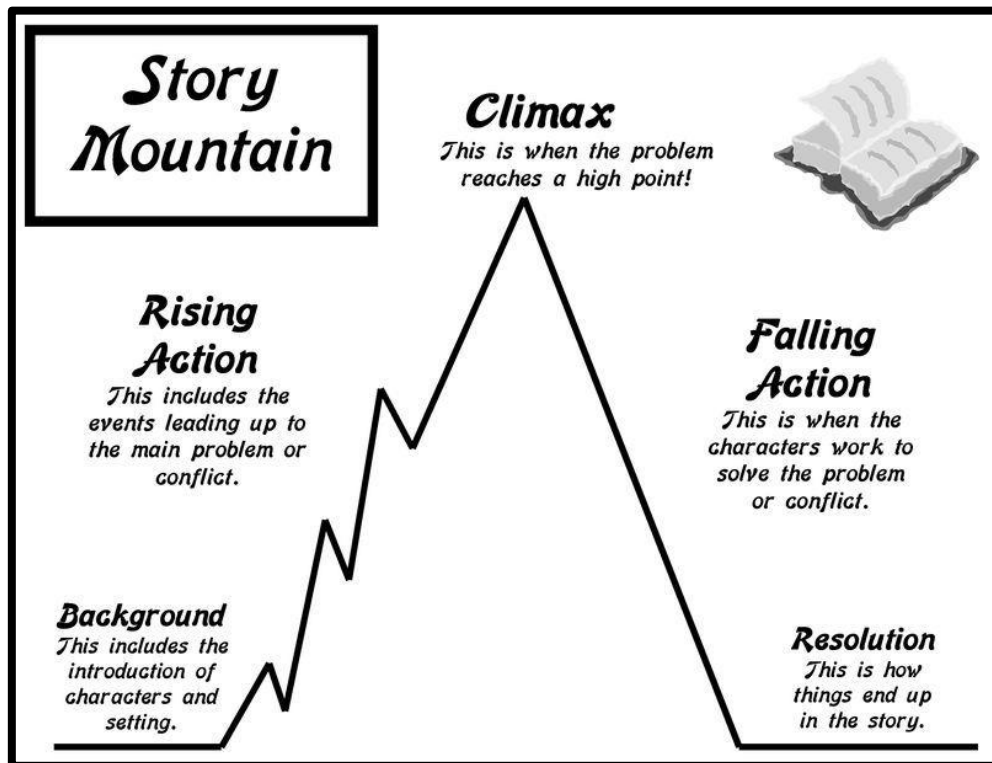
	<i>Mon</i>	<i>Tue</i>	<i>Wed</i>	<i>Thurs</i>	<i>Fri</i>
One day of NWMM <u>Week 33</u> & Problem Solving					
Watch a short cartoon on Cúla4					
Read a book of choice					
Practice tables					
Exercise					
One page of handwriting (twice a week)					

Six other challenges are posted for this week for your child to engage with.

Challenge 1	English: Narrative Writing
Challenge 2	Maths: Weight
Challenge 3	Gaeilge: Mé Féin
Challenge 4	History: History Detective
Challenge 5	Art: Paper Roll Holder Art
Challenge 6	Book Review

Challenge 1: Narrative Writing

Narrative writing involves creating a story that entertains and engages the reader. It follows a specific sequence that can be seen in the Story Mountain diagram below.



Remember, to help the reader enjoy your narrative, you should include:

- Descriptive adjectives to portray the setting and the characters -
The tall, clever boy looked around the dark and eerie room.
- Powerful verbs to describe the characters' movements -
The frightened child scurried across the floor.
- Speech marks to show when a character is talking -
"I don't like doing my homework," complained Ciara.

Task:

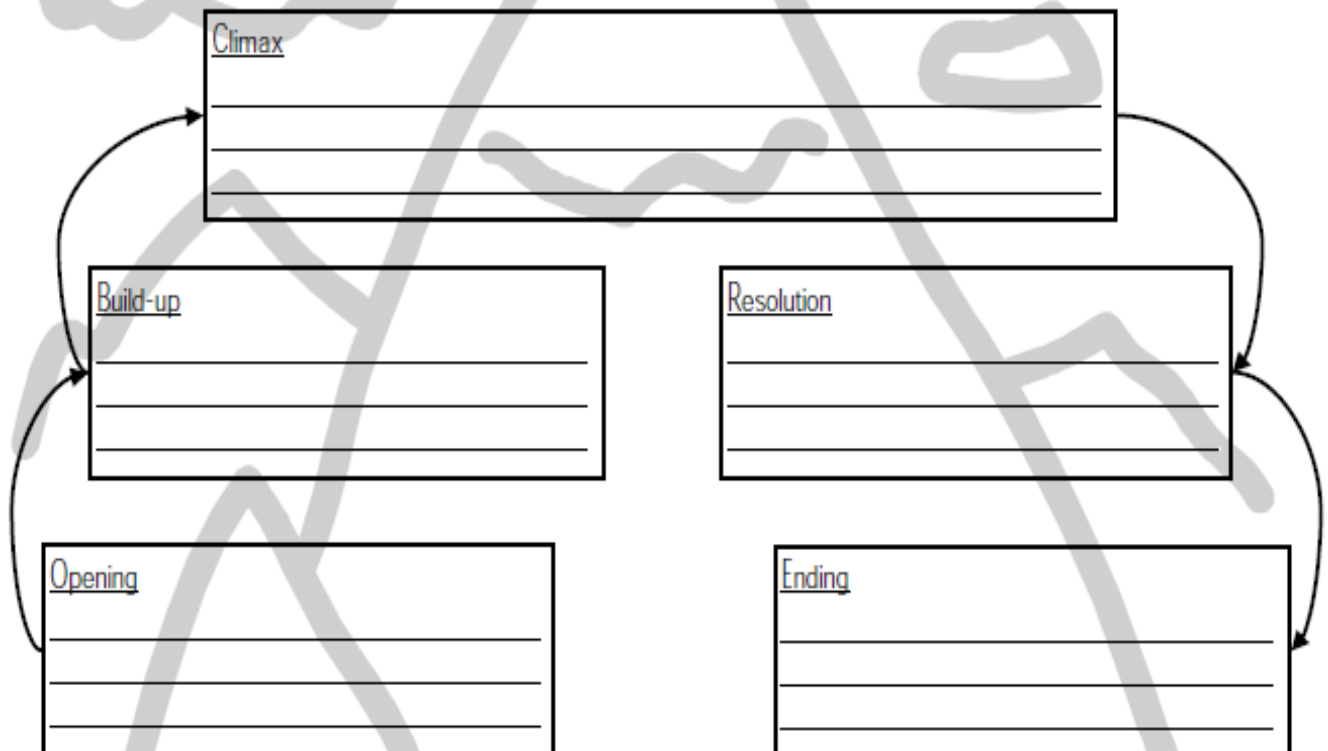
1. From the box below, pick a character, setting and problem that will help you to write an interesting narrative.

Character	Setting	Problem
A detective	Hot desert	Someone or something is lost
A child called ____	School	A mysterious discovery is made
A teacher	Haunted house	Someone is injured
A photographer	Outer space	An unexpected visitor arrives
An astronaut	A busy city	The electricity goes

2. Using bullet points, plan your narrative in the story mountain template below.

My Story Mountain

Title: _____



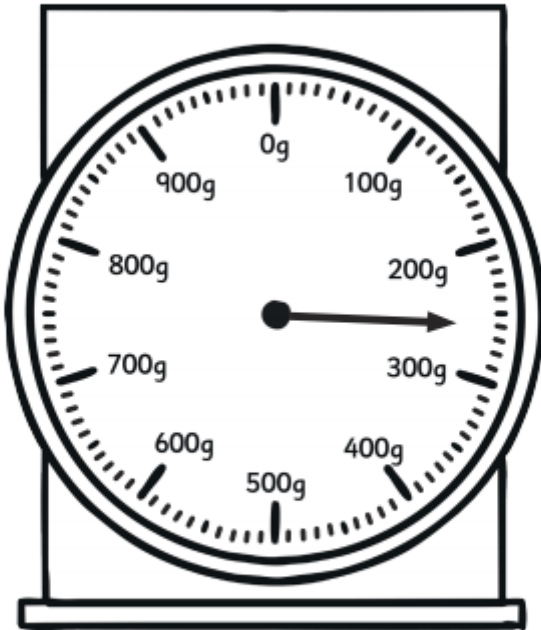
3. Write a descriptive narrative based on your plan.
*Don't forget capital letters, full stops and speech marks. You should start a new paragraph for each stage in the story mountain.

Challenge 2: Weight

1.

Reading Scales

Weighing scales can be read like a clock, the dial indicator moves as the weight increases. Each big line is 100g, each small line is 10g, the arrow shows 260g.



Draw arrows on the scale to show these weights:

- a. 520g
- b. 400g
- c. 960g
- d. 1000g

2. With permission from your parents/guardians, use a weighing scales to calculate the weight of these objects. The last two boxes are blank to allow you to pick your own items to weigh.






<i>Object:</i>	<i>Unit of measurement: (g or kg)</i>	<i>Estimated weight:</i>	<i>Actual weight:</i>
Pencil			
Dinner plate			
Mug			
NWM book			

Written Computation

- | | | | | |
|--|--|--|--|--|
| 1. $\begin{array}{r} 2.425\text{kg} \\ 3.685\text{kg} \\ + 1.735\text{kg} \\ \hline \end{array}$ | 2. $\begin{array}{r} 3.685\text{kg} \\ 2.734\text{kg} \\ + 1.586\text{kg} \\ \hline \end{array}$ | 3. $\begin{array}{r} 1.678\text{kg} \\ 2.739\text{kg} \\ + 3.924\text{kg} \\ \hline \end{array}$ | 4. $\begin{array}{r} 4.367\text{kg} \\ 2.586\text{kg} \\ + 1.392\text{kg} \\ \hline \end{array}$ | 5. $\begin{array}{r} 3.089\text{kg} \\ 2.768\text{kg} \\ + 2.943\text{kg} \\ \hline \end{array}$ |
| 6. $\begin{array}{r} 8.927\text{kg} \\ - 3.568\text{kg} \\ \hline \end{array}$ | 7. $\begin{array}{r} 9.243\text{kg} \\ - 4.586\text{kg} \\ \hline \end{array}$ | 8. $\begin{array}{r} 6.425\text{kg} \\ - 1.738\text{kg} \\ \hline \end{array}$ | 9. $\begin{array}{r} 7.034\text{kg} \\ - 3.256\text{kg} \\ \hline \end{array}$ | 10. $\begin{array}{r} 9.005\text{kg} \\ - 4.687\text{kg} \\ \hline \end{array}$ |
| 11. $\begin{array}{r} 1.735\text{kg} \\ \times 3 \\ \hline \end{array}$ | 12. $\begin{array}{r} 1.497\text{kg} \\ \times 6 \\ \hline \end{array}$ | 13. $\begin{array}{r} 2.438\text{kg} \\ \times 4 \\ \hline \end{array}$ | 14. $\begin{array}{r} 1.036\text{kg} \\ \times 8 \\ \hline \end{array}$ | 15. $\begin{array}{r} 1.209\text{kg} \\ \times 7 \\ \hline \end{array}$ |
| 16. $5 \overline{)3.975\text{kg}}$ | 17. $3 \overline{)7.926\text{kg}}$ | 18. $4 \overline{)9.372\text{kg}}$ | 19. $6 \overline{)8.574\text{kg}}$ | 20. $7 \overline{)6.797\text{kg}}$ |

Bonus Challenge

Written Problems

-  Jack weighs 43.76kg and Emma weighs $39\frac{3}{5}$ kg.
What is the total weight of the two children? _____
-  One parcel weighs 8.36kg. Another parcel weighs $5\frac{3}{4}$ kg.
What is the difference in weight between the two parcels? _____
-  A box of mushrooms weighs 1.365kg.
What is the total weight of 7 boxes of mushrooms? _____
-  The total weight of the three boxes is 17.135kg.
Two of the boxes weigh $7\frac{1}{10}$ kg and 6kg 378g.
What is the weight of the third box? _____
-  The total weight of 3 hens is 5.775kg.
What is the average weight of a hen? _____

Challenge 3: Mé Féin

1. Léigh an scéal faoi Róisín agus a dialann scoile nua agus freagair na ceisteanna.
Read the story about Róisín and her new school diary and answer the questions.

Dialann Scoile Róisín

Bhi Róisín ar ais ar scoil. Bhi dialann scoile nua aici. Scriobh Róisín a hainm, a hois agus a lán rudai eile og an tús. Chuir sí pictiúr di féin isteach ann freisin.



Ainm
Róisín
Aois
Aon bhliain déag d'aois
Rang
5
Tír
Éire

Is maith liom:

peinteadáil
léamh
siopadóireacht
éadaí
cispheall
grán rósta
uachtar reoite
Westlife
éisteacht le ceol
féachaint ar an teilifís
fanacht sa leaba
obair sa ghairdín
siúl le mo mhádra
luí ar an tolg
Bongó, mo mhádra

Ní maith liom:

báisteach
iascaireacht
éirí go luath
siúl ar scoil
mo mháda scoile trom
an éide scoile
obair bhaile
cleachtadh pianó
damháin alla
boladh stocai pelle



Cleachtáí

A. Fíor nó Breagach?

- Tá Róisín aon bhliain déag d'aois.
- Is maith le Róisín Westlife.
- Ní maith le Róisín obair sa ghairdín.
- Is maith le Róisín iascaireacht.
- Ní maith le Róisín éirí go luath.
- Ní maith le Róisín damháin alla.

B. Freagair na ceisteanna.

- Cén aois í Róisín? Tá sí _____
- An maith le Róisín peinteadáil? Is maith _____
- An maith le Róisín féachaint ar an teilifís? _____
- An maith le Róisín báisteach? Ní maith _____
- An maith le Róisín boladh stocai pelle? _____
- An maith le Róisín siúl lena mádra? _____



C. Líon na beannaí.

- _____ le Róisín grán rósta.
luí ar an tolg
- _____ le Róisín cleachtadh pianó.
obair bhaile
- Ní maith le Róisín _____
Is maith
- Is maith le Róisín _____
Ní maith

D. Faigh 4 fhocail ón scéal ar na bratacha.

- _____
- _____
- _____
- _____



2. Bain úsáid as an suíomh gréasáin <https://www.focloir.ie/> chun an bhileog oibre seo a líonadh amach bunaithe ar "Mé Féin."

Use the website <https://www.focloir.ie/> to help you fill out this worksheet all about yourself.

Mise!

Ainm: _____

Aois: _____

Breithlá: _____

Ba mhaith liom a bheith i mo _____

nuair atá mé níos sine.

_____ is ainm do mo mhúinteoir.

Scríobh síos d'ainm sárlaoich anseo!



Na Rudaí is Fearr Liom!

Bia: _____

Clár Teilifíse: _____

Scannán: _____

Leabhar: _____

Spórt: _____

Áit: _____

Ainmhí: _____

Loethanta Saoire: _____



Seo mise!



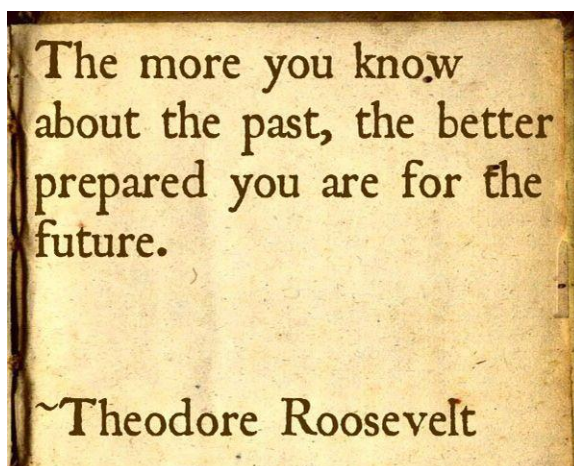
Is maith liom scoil mar:

Mo Chaitheamh Aimsire:

Mo Chlann!



Challenge 4: History Detective



1. From the list below, choose one event in history that you would like to find out more about:
 - The moon landing in 1969.
 - Alexander Graham Bell and the invention of the telephone.
 - Thomas Edison and the invention of the lightbulb.
 - Marie Curie and her work in radioactivity.
2. Using relevant resources that you have in your home and/or information on <https://www.kiddle.co/>, carry out research on this event. Use the template on the next page to guide your research and to record your findings.

history detective

Event you are studying: _____

What are 3 questions you have about this event?

1. _____
2. _____
3. _____

Do your research:

Time and place:	Who was involved?	Important Information:

Answers to your 3 questions:

1. _____

2. _____

3. _____

Why was this an important event in history?

Challenge 5: Paper Roll Holder Art



Get creative with an empty toilet/kitchen roll holder and other arts and crafts materials available in your home for this week's art challenge! You could recreate one of the examples above or make your own unique design.

Don't forget to upload a picture of your artwork to your Portfolio on Class Dojo!

Useful Websites

<https://www.cula4.com/en/watch/>

Pick a cartoon to watch every day!

<https://www.duolingo.com/learn>

Revise your Gaeilge vocabulary with these fun quizzes

<https://stories.audible.com/start-listen>

Stream and listen to a range of children's stories on your laptop, phone or tablet

https://www.mathplayground.com/grade_5_games.html

Practice a range of Maths skills by choosing from the games in the 5th Grade section

<https://www.youtube.com/playlist?list=PLyCLOpd4VxBvQafyve889qVcPxYEjdST>

!

PE with Joe. 30 minute workouts for children